



New Horizons EAL

William Book



Name:

Start Date:



Colours 3 Activity 1

Can you match the colour to the right picture?



Leopard Spot



Strawberry Roan



Dapple Grey




Blue Dun




Colours 3 Activity 2


Can you colour these horses in so that they're the same colour as the word next to them?



Skewbald



Dun



Blue Dun



Colours 3 Activity 3

Which horses at New Horizons are:

BAY

LEOPARD SPOT

SKEWBALD



Markings 3 Activity 1

Can you match the word to the picture?



Dorsal Stripe



Pastern



Coronet

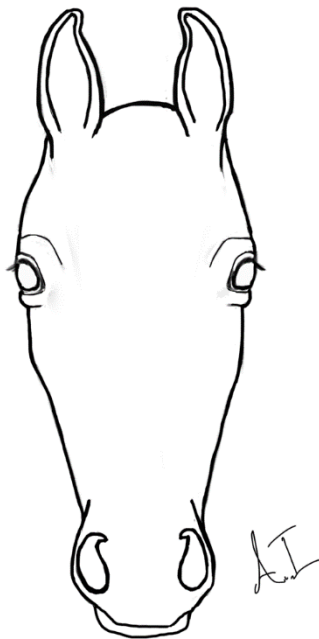
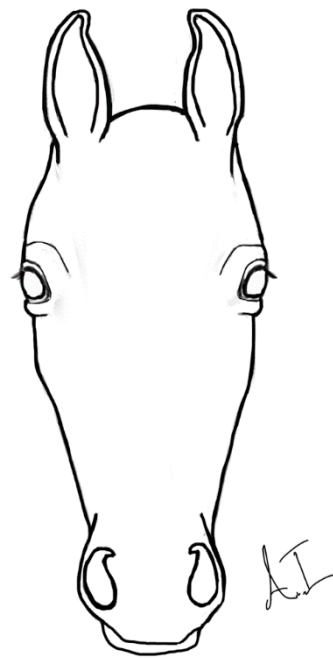
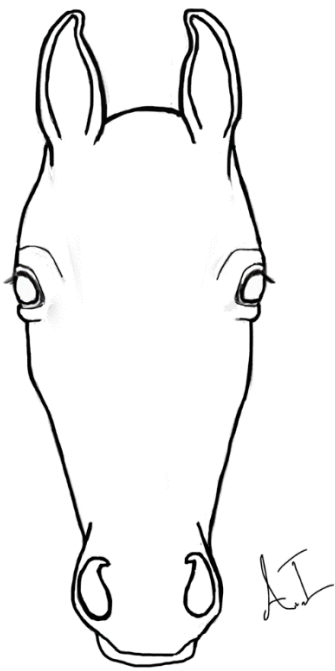


Mealy Muzzle



Markings 3 Activity 2

Can you draw a different marking on each of these parts of the horse?





Parts of the Horse 3 Activity

Can you comment on whereabouts on the horse you would find the following parts (eg chestnut - found on the inside of the horse's legs above the knee/hock):

- Forelock
- Fetlock
- Dock
- Withers
- Poll



Breeds of Horse 3 Activity 1

Can you match the pictures to the correct word?



Highland Pony



Cob



Fell Pony



Connemara



Welsh Cob



Breeds of Horse 3 Activity 2

Can you match each breed & description to the picture?

This breed's winter coat consists of a layer of strong, badger-like hair over a soft, dense undercoat which enables this breed to live out in all types of weather. Their height is 13-14.2hh. The head is well carried and alert with a kindly eye, broad muzzle and deep jawline. A reasonable length of neck goes from the withers with a good sloping shoulder. Feathered hair behind the fetlocks is soft and silky.




Average height is 13.2hh with a height limited of 14hh. The breed was bred for the mountainous environment of Cumbria so they are adapted to almost any temperate climate. They can be black, brown, bay or grey. They should be hardy and show good pony characteristics including strong, flat bone. The breed generally has a steady temperament.



The largest of the Welsh pony sections. They must be taller than 13.2hh with no upper height limit. They are used as riding horses and are also used for driving. They are known for their hardiness & gentle nature. Their head remains full of pony character with large eyes and neat ears. The legs may be relatively short, also akin to pony proportions. They have a powerful, extravagant action.



This breed is usually 14-14.2hh. The head is straight, neat and broad between the eyes with a fine muzzle and incurving ears. The body is fairly short in the black with a broad and deep rib cage, long, broad and well muscled quarters, a well-muscled neck of a good length joining neatly into strong withers and strong sloping shoulder. The legs are very muscular with hard, dense bone. They come in Black, brown, bay, grey and roan only.





Grooming Kit 3 Activity 1

A horse comes in from the field caked in thick, dry mud. Which curry comb would you use to clean it?

- a) Rubber Curry Comb
- b) Plastic Curry Comb
- c) Metal Curry Comb

The brush you're using to groom the horse with is very dirty. Which curry comb would you use to clean it with?

- a) Rubber Curry Comb
- b) Plastic Curry Comb
- c) Metal Curry Comb

The horse you're grooming is moulting. Which curry comb should you use?

- a) Rubber Curry Comb
- b) Plastic Curry Comb
- c) Metal Curry Comb



Grooming Kit 3 Activity 2

Which of these pictures is NOT a Rubber Curry Comb?

Circle any brush that you think shouldn't be here.





Grooming Kit 3 Activity 3

Write the names of the grooming kit brushes in the order that you would use them on the horse's body.

Be careful! Some of the brushes aren't brushes you would use!

- 1.
- 2.
- 3.
- 4.

Rubber Curry Comb Body Brush Dandy Brush

Plastic Curry Comb Metal Curry Comb Hoof Pick

What would be best to use to clean out a horse's foot?

- a) Mane & Tail Comb
- b) Sponge
- c) Hoof Pick

What would be best to use to comb out a horse's mane?

- a) Mane & Tail Comb
- b) Sponge
- c) Hoof Pick



Leading 3 Activity 2

With the help of a facilitator, have a go at 'sending' a horse forward by putting energy behind the 'drive line'.

Can you mark the drive line on the picture below?



Can you say what is meant by sending a horse forward?



Horse Safety 3 Activity

Take part in a herd observation activity with the facilitators and then have a go at answering these questions.

Which horse do you think is the herd leader and why?

Which horse do you think is bottom of the herd and why?


Why do you think it is important to know the herd order?

Do you have any ideas on where the other horses fit in the herd order?



Horsemanship 1 Activity

Mark on the picture below where you would stand to ask a horse to step backwards. Also show which direction you would be facing.



When a horse has done what we have asked it to do and taken a step back, what must we do to reward it?